



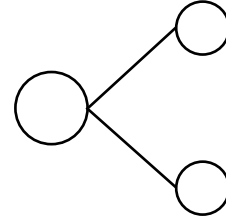
NAME \_\_\_\_\_

DATE \_\_\_\_\_

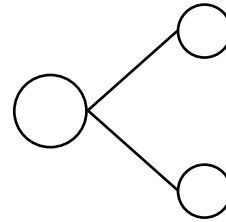
## SUBTRACTIONS (USING 9)

Draw and round 9. Solve and make a number bond.

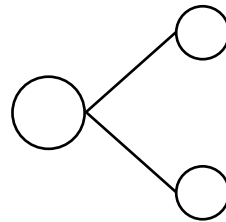
a)  $12 - 9 = \underline{\quad}$ .



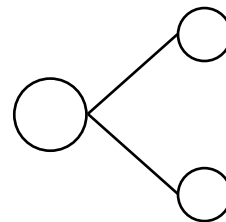
b)  $16 - 9 = \underline{\quad}$ .



c)  $15 - 9 = \underline{\quad}$ .



d)  $11 - 9 = \underline{\quad}$ .



e)  $17 - 9 = \underline{\quad}$ .

